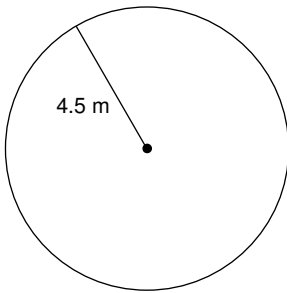


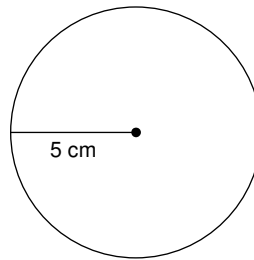
Circles

Find the circumference of each circle. Round to the nearest tenth.

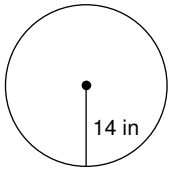
1)



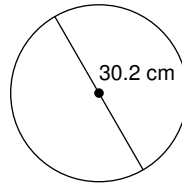
2)



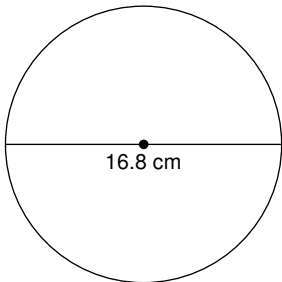
3)



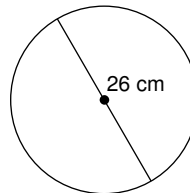
4)



5)



6)

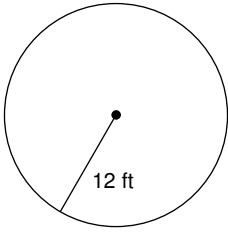


7) radius = 12 yd

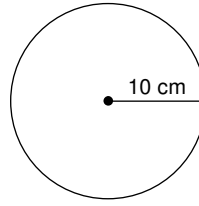
8) radius = 5.5 mi

Find the area of each. Round to the nearest tenth.

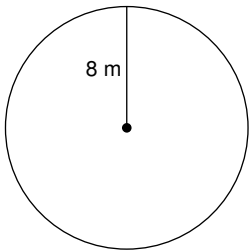
9)



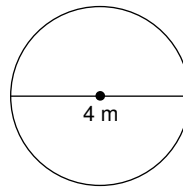
10)



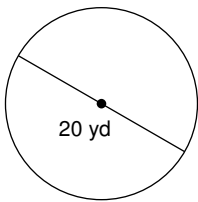
11)



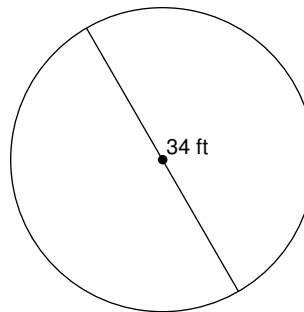
12)



13)



14)



15) radius = 8 ft

16) radius = 5 cm

Find the diameter of each circle.

17) area = 4π in²

18) area = 49π yd²

19) circumference = 162π yd

20) circumference = 30π yd